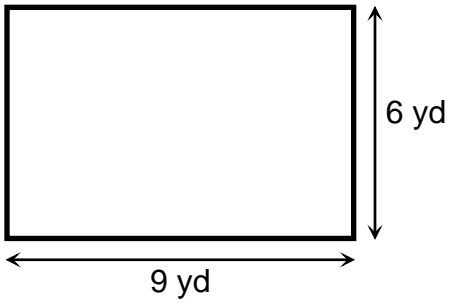
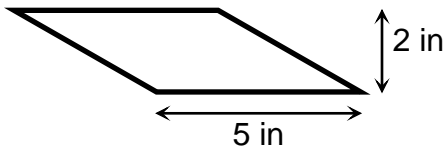
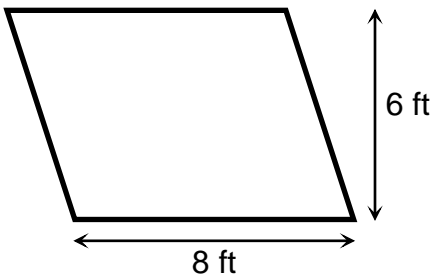


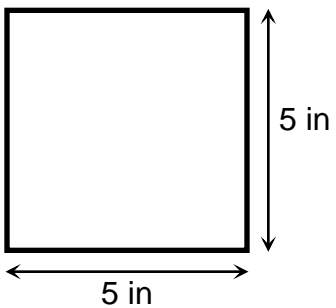
Name _____ Date _____

Find the area.



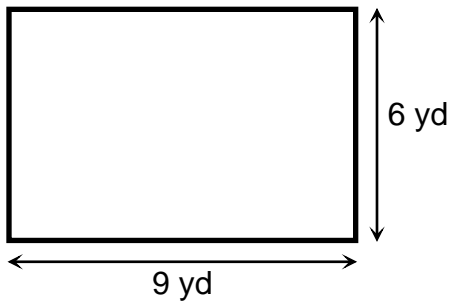






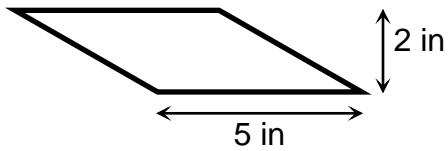
Answer Key

Find the area.



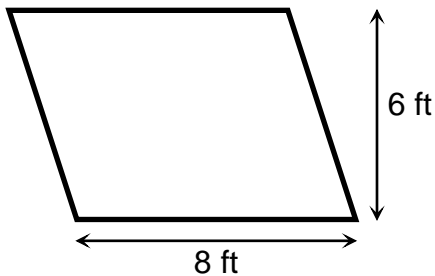
$$\text{Area} = 9 \text{ yd} \times 6 \text{ yd}$$

$$\text{Area} = 54 \text{ sq. yd}$$



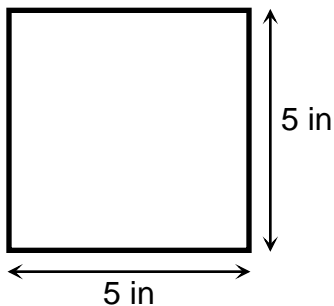
$$\text{Area} = 5 \text{ in} \times 2 \text{ in}$$

$$\text{Area} = 10 \text{ sq. in}$$



$$\text{Area} = 8 \text{ ft} \times 6 \text{ ft}$$

$$\text{Area} = 48 \text{ sq. ft}$$



$$\text{Area} = 5 \text{ in} \times 5 \text{ in}$$

$$\text{Area} = 25 \text{ sq. in}$$